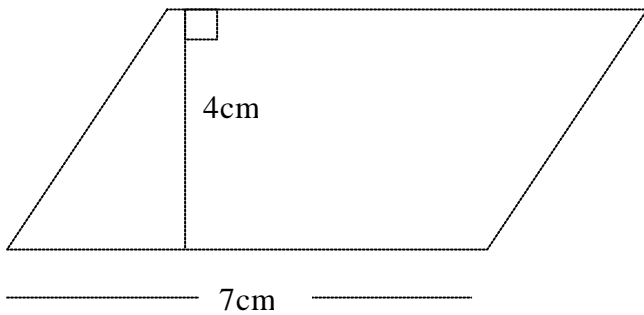


Area of Parallelograms

Level 5 concept

Area of a Parallelograms how to answer questions in full



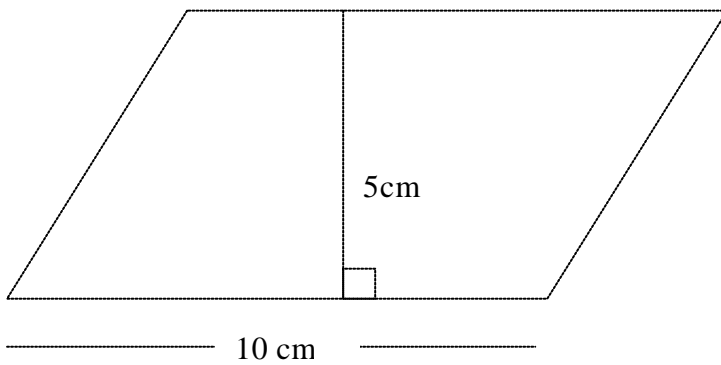
Area (Parallelogram)

$$= PH \times B$$

$$= 4\text{cm} \times 7\text{cm}$$

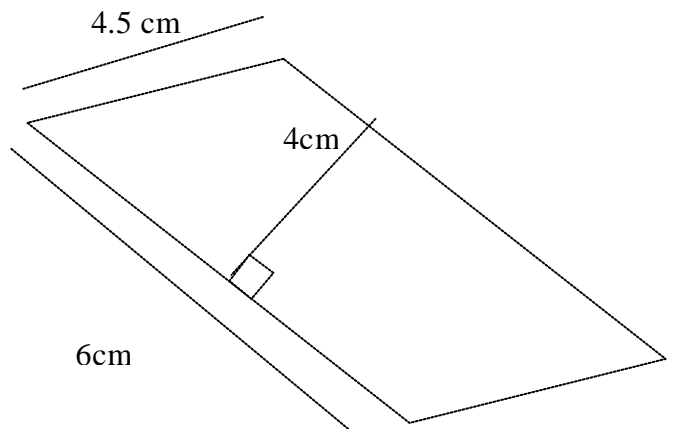
$$= 28 \text{ cm}^2$$

Note the answer is in square units



Show your full working out here

Show your full working out here



Be careful which measurements you use.