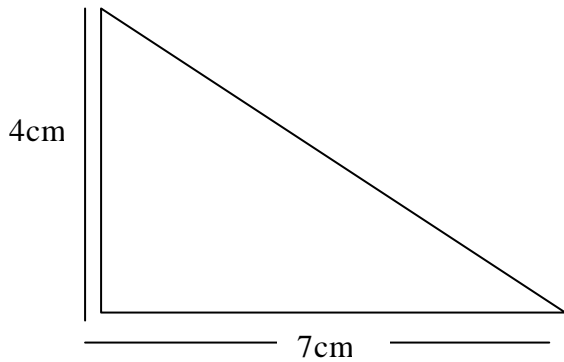


Area of Triangles

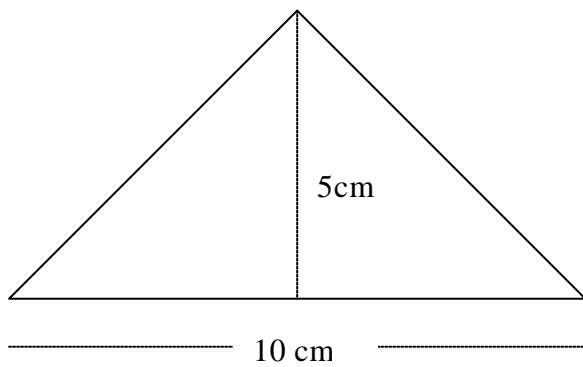
Level 5 concept

Area of a triangle how to answer questions in full



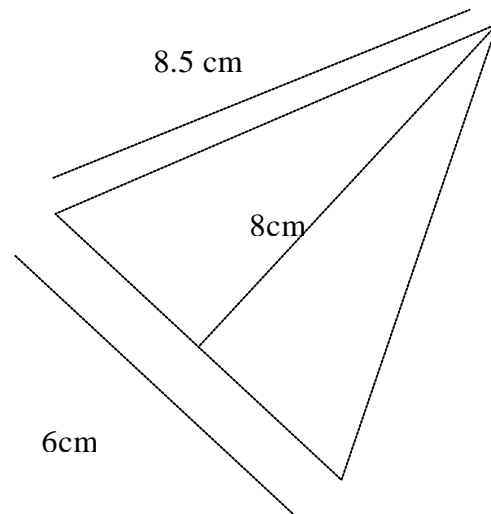
$$\begin{aligned}\text{Area (Triangle)} &= \frac{1}{2} \times \text{PH} \times \text{B} \\ &= \frac{1}{2} \times 4\text{cm} \times 7\text{cm} \\ &= 14\text{ cm}^2\end{aligned}$$

Note the answer is in square units



Show your full working out here

Show your full working out here



Be careful which measurements you use.